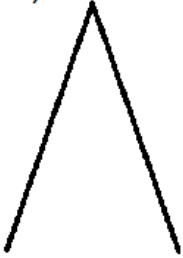


7-6)


Consider the objects below, made of a uniform wire. Using symmetry and/or other arguments, find the center of mass of each. Each straight piece of wire is of length L and mass M .

HINT: B is the most difficult.


A)



B)



C)



D)

